

# YUDESI NURSERY AND PRIMARY SCHOOL

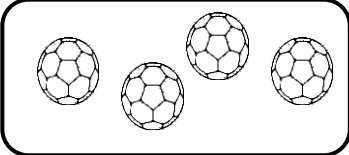
## P.1 NUMERACY HOLIDAY PACKAGE TERM 1, 2020


Name: \_\_\_\_\_ Stream: \_\_\_\_\_

### SETS

1. A \_\_\_\_\_ is a group of objects / things.

2. Name these sets.

a)  A set of \_\_\_\_\_

b)  A set of \_\_\_\_\_

c) {                      } \_\_\_\_\_

3. Draw these sets.

a) A set of 3 flowers.

---

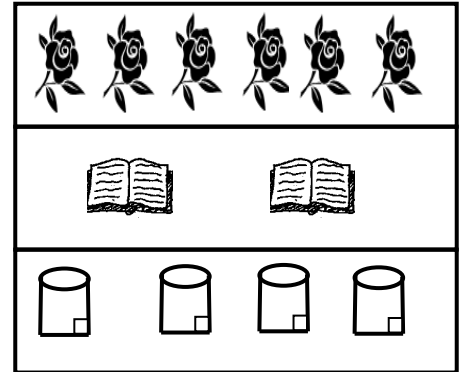
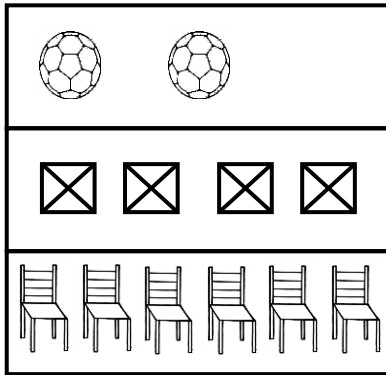
b) A set of pencils.

---

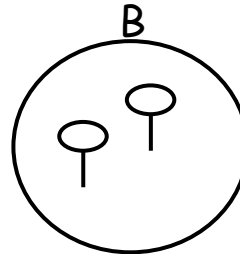
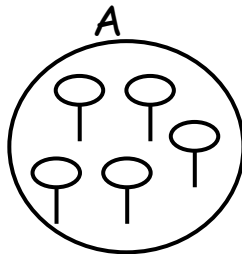
c) An empty set.

---

4. Match correctly.



5. Use less or more to compare the sets.

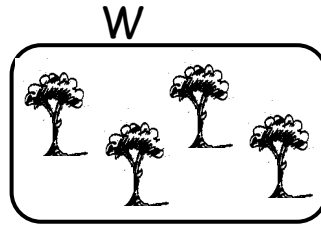
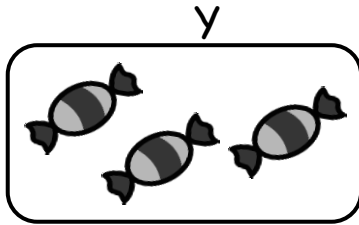


a) Set A has \_\_\_\_\_ members.

b) Set B has \_\_\_\_\_ members.

c) Set \_\_\_\_\_ has less members than set \_\_\_\_\_.

6. Answer correctly.



a) Which set has more members?

---

b) Which set has less members?

---

c) How many elements are in set Y?

---


d) How many elements are in set Y and Z?

---

e) Which set has four members?

---

7. Form / make new sets.



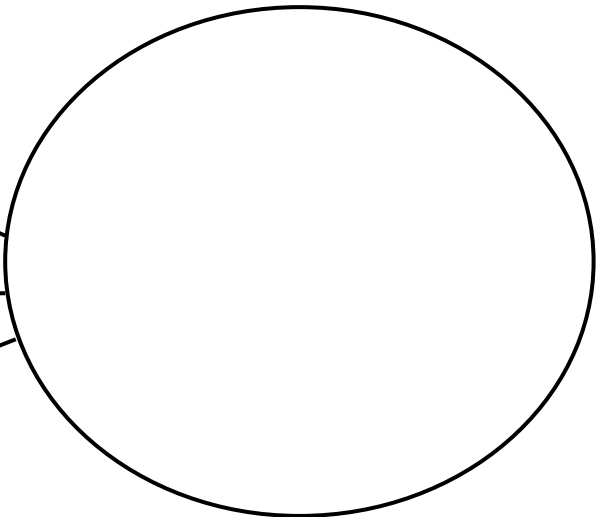
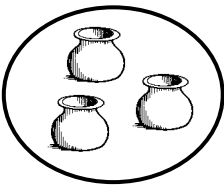
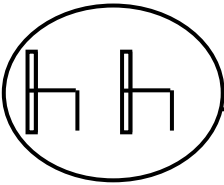
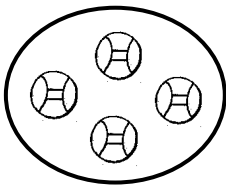
A set of  \_\_\_\_\_

A set of  \_\_\_\_\_

A set of  \_\_\_\_\_

A set of  \_\_\_\_\_

8. Form a big set from small sets.



WHOLE NUMBERS:

9. Arrange numbers from the smallest to the biggest.

a) 7, 1, 2 = \_\_\_\_\_

b) 12, 18, 15 = \_\_\_\_\_

c) 5, 9, 3, 1 = \_\_\_\_\_

d) 50, 10, 20, 40, 30 = \_\_\_\_\_

10. Write in words.

a) 11 \_\_\_\_\_

b) 12 \_\_\_\_\_

c) 18 \_\_\_\_\_

d) 20 \_\_\_\_\_

e) 32 \_\_\_\_\_

f) 33 \_\_\_\_\_

g) 40 \_\_\_\_\_

h) 47 \_\_\_\_\_

11. Write the number symbol.

a) twenty-two \_\_\_\_\_

b) twenty \_\_\_\_\_

c) thirty-nine \_\_\_\_\_

d) forty-three \_\_\_\_\_

e) fifty \_\_\_\_\_

f) fifteen \_\_\_\_\_

12. Write the number after.

a) 24, \_\_\_\_\_

b) 41, \_\_\_\_\_

c) 36, \_\_\_\_\_

d) 45, \_\_\_\_\_

e) 12, \_\_\_\_\_

f) 49, \_\_\_\_\_

g) 29, \_\_\_\_\_

13. Which number comes before?

a) \_\_\_\_\_, 22

b) \_\_\_\_\_, 8

c) \_\_\_\_\_, 15

d) \_\_\_\_\_, 20

e) \_\_\_\_\_, 38

f) \_\_\_\_\_, 17

14. Circle the greater number.

a) 14 and 41

b) 32 and 23

c) 08 and 03

d) 10 and 50

15. Underline the smallest number.


a) 1, 2, 3


b) 10, 11, 9, 4

c) 50, 10, 20, 30

d) 22, 12, 42

16. Count and write tens and ones.

a)  = \_\_\_\_\_  
\_\_\_\_ tens \_\_\_\_ ones = \_\_\_\_\_

b)  = \_\_\_\_\_  
\_\_\_\_ tens \_\_\_\_ ones.

c)   
\_\_\_\_ tens \_\_\_\_ ones = \_\_\_\_\_





e) Sarah has 8 books. Jane has 4 books.  
How many books do they have altogether?

---

f) How many legs do 2 boys have?

---

g) Nine subtract three equals \_\_\_\_\_

h) 10 minus 2 equals \_\_\_\_\_

i) three takeaway zero equals \_\_\_\_\_